

Geometry Unit

Lesson 3: Volume

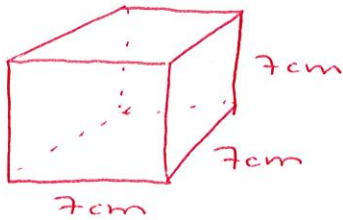
Name: _____

Date: _____

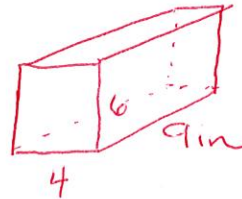
Directions: Find the volume of each prism.

1. $V =$ _____

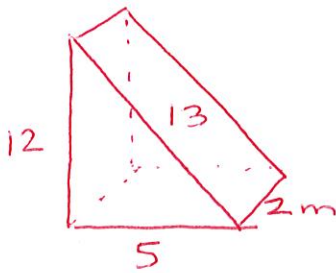
1.



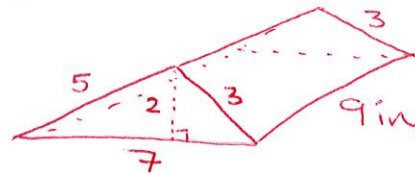
2.



3.



4.



5. Compare / Contrast

Surface Area

v.

Volume

